

Std: 8th Social Science Bridge Course Academic Year 2022-23

History and Political Science Bridge Course Pre - Test

Marks: 10

Student name _____

Q. 1. Fill in the gaps with the appropriate option. (2)

(1) At higher altitudes air becomes

(thicker/thinner/ hotter)

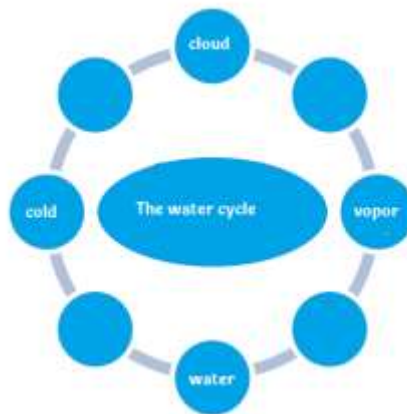
(2) If the axis of the earth were not tilted

(The earth would not have rotated around itself./The earth would have revolved around the sun with greater velocity./ Different parallels on the earth would have experienced the same climate throughout the year.)

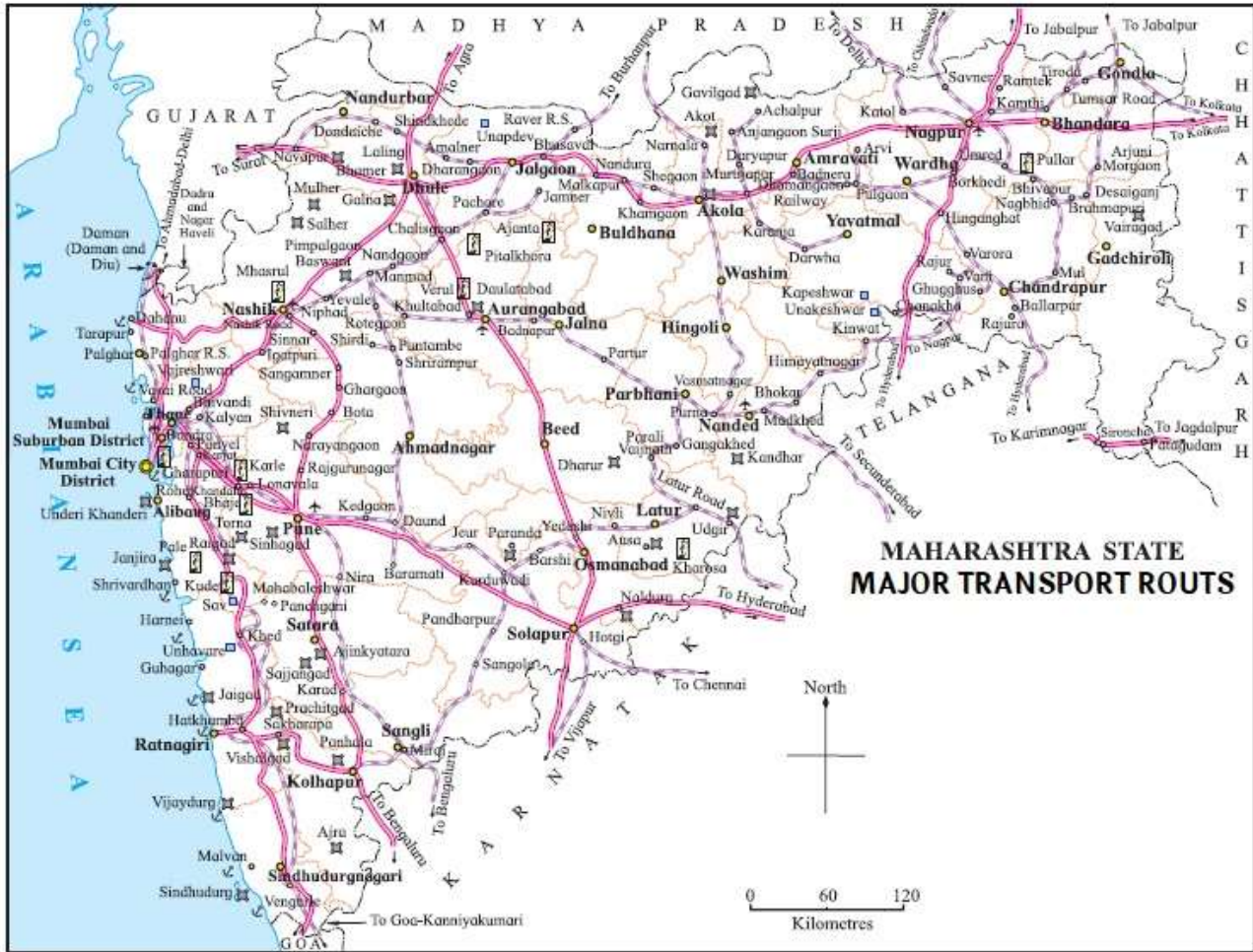
Q. 2. Complete the following table. (2)

Parallels	Meridians
1.The axes are circular.	1.
2.	2. The measure of every meridian has the same.
3. The two adjacent axes have equal distances everywhere.	3.
4. All axes are parallel to each other.	4.

Q. 3. Complete the chain. (2)




Q.4. Observe the following map and make suitable index for it. (2)



Or

Q.4. Create Polygraph based on the following statistical information. (2)

Location	From the maximum temperature in °C.	From the minimum temperature in °C.	Location	From the maximum temperature in °C.	From the minimum temperature in °C.
Beijing	18.4	8.4	Kabul	14.7	5.2
Istanbul	18	10	New York	16.3	8.3
Madrid	19	9	Baghdad	30.4	14.7



Q. 5. Give geographical reasons: (Any two) (2)

1. In the monsoon region, mainly farming is done.
2. Why is the air pressure in both hemispheres higher in the polar region?
3. The animal husbandry business complements agriculture.

Q.6. Answer the following questions: (Any One) (2)

1. Which are the Elements of map?
2. which are the Elements of Weather?