

=====

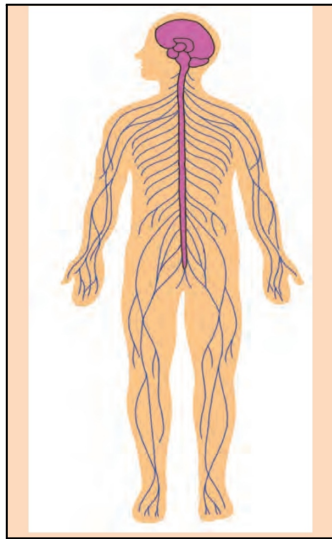
Q.1) Fill in the blanks. (moon, tiger, Atmosphere)

3 Marks

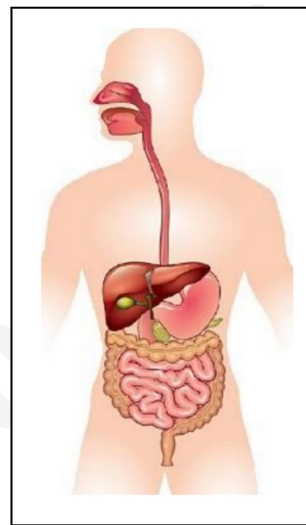
- A. _____ is the satellite of the earth.
- B. Living things occupy parts of the lithosphere, hydrosphere as well as the _____
- C. Tadoba National Park is famous for _____.

Q.2) Write the names of the following organ system and the name of the two most important organs.

2 Marks



A



B

Q. 3) Answer in one word.

3 Marks

- A. What is the largest source of energy ? _____
- B. Which star is closest to Earth? _____
- C. Ozone gas is found in which layer of the atmosphere? _____

Q.4) Write down which nutrients are obtained from the following source.

2 Marks



Q.5) Why did this happen ?

4 Marks

A. Jaundice spread in the village.

B. Soil fertility decreased.

Q.6) Write what will happen

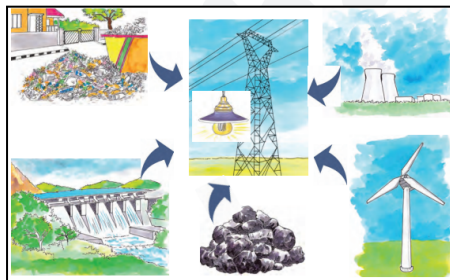
4 Marks

A. The body does not get enough protein.

B. The forests of the earth were destroyed.

Q.7) Write the names of the energy sources in this picture and answer the following questions.

2 Marks



A. Which sources of energy are shown in this picture?

B. Those resources are converted into which form of energy
