

State council for Educational Research and Training, Maharashtra

Bridge Course - Pre Test

Sub: Mathematics

Standard Five

Marks -15

Student Name - .....

Que. 1. For the Republic Day programme, Manava practiced singing from 21<sup>st</sup> January to 24<sup>th</sup> January, how many days did she practice in total? (Mark 1)

.....

Que. 2. Solve the example.  $3578 + 4587$  (Mark 1)

Que. 3. Solve the example vertically.  $5320 - 450$  (Mark 1)

TH	H	T	U

Que. 4. In a School, 11 students in each row for a prayer. How many students in 15 rows? (Mark 1)

Que. 5. Kedar brought **48** notebooks as a birthday gift. If he decides to share three notebooks to each friend, how many friends will get the notebooks?

(Mark 1)

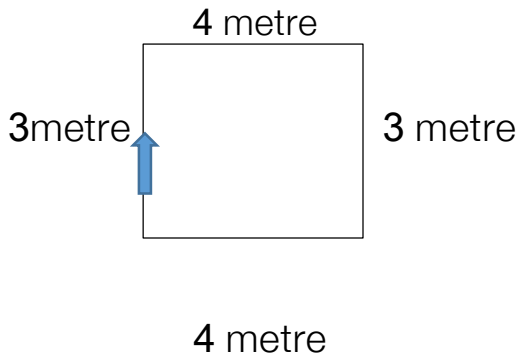
Que. 6. Solve.  $5 \overline{)545}$

( Mark 1)

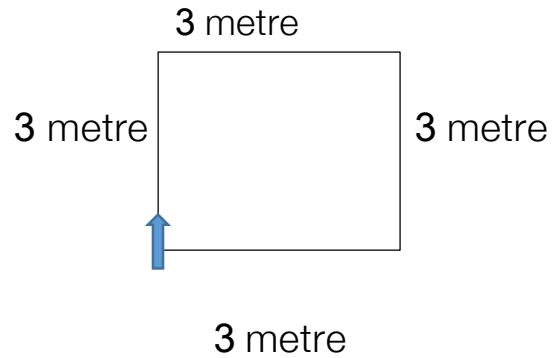
Que. 7. Both Gokul and Maroti had hundred rupees each. Gokul spent Rs. **12** and Maroti spent Rs. **18**. How much money do they each have left? (Mark 1)

Que. 8. If we added four tens and three hundred in the given number **1275**, What will be the answer? (Mark 1)

Que. 9. Rajan's runway



Anil's runway



On the above runway If both of them have completed one round, mark the following statement as ( X ) incorrect. (Mark 1)

- A) Rajan ran 14 metres.
- B) Anil ran 12 metres.
- C) Anil ran 2 metres more.
- D) Rajan ran 2 metres more.

Que. 10. Observe and write down the total amount given in the box. (Mark 1)



₹

Que. 11. Write the given fraction in words.  $9\frac{1}{2}$  (Mark 1)

.....

Que. 12. Write the answers by observing the following table.

(Mark 2)

Name	Flowers
Anjali	
Rukhasar	
Vaibhav	
Aliya	

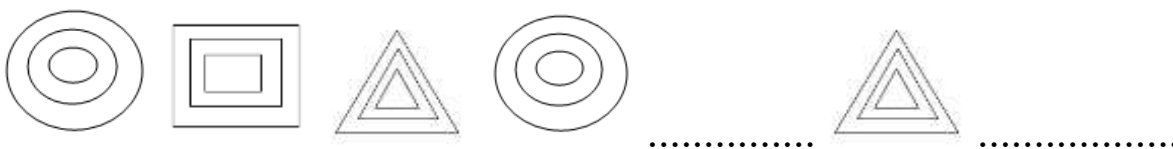
 = 10 Flowers

- How much flowers are less of Rukhasar than the flowers of Anjali?

- If the flowers of Anjali and Aliya are combined, how much more will that number be than that of Vaibhav?

Que. 13. Complete the pattern given below.

(Mark 1)



Que.14. Amit has 24 boxes of mangoes, each containing 12 mangoes. So how Many mangoes does he have in total?

(Mark 1)

x	20	4	<input style="width: 100%; height: 100%;" type="text"/>
10			
2			