

Student Name - .....

Que.1. Which of the following figure is Triangle? Draw ☺ mark below it . (1 mark)



Que.2. Write the number formed by 60 Tens and 33 units. (1 mark)

(In numbers and words)

Que.3. Solve the following examples. (2 Marks)

$$1) \begin{array}{r} 586 \\ +199 \\ \hline \end{array}$$

$$2) \begin{array}{r} 513 \\ -108 \\ \hline \end{array}$$

Que.4. Write the names of at least two items you have seen that are measured in both kilograms and liters. (1 Mark)

Ans: .....

Que.5 Show 11:30.in the given clock. (1 Mark)



Que.6. Sadhana has 1 note of Rs.200, 2 notes of Rs.50 and 5 coins of Rs.2. How many rupees does she have? (1 Mark)



Answer: -Sadhana has total ₹

Que.7. If 45 apples are arranged evenly in 5 boxes, how many apples will be in each box? (1 Mark)

Que.8. Complete the following pattern. (1 Mark)

**	****	**	****	**	
----	------	----	------	----	--

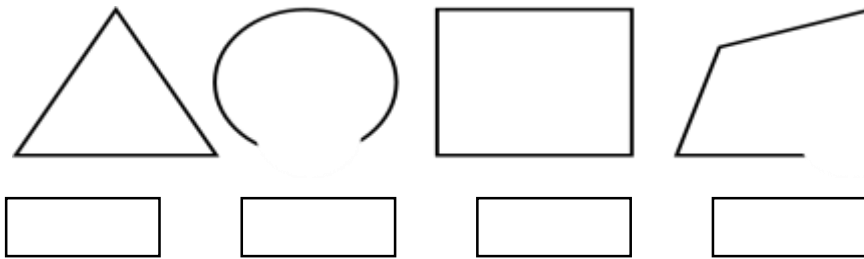
Que.9. If 44 persons can travel in one bus. Then how many persons will travel in 15 buses? (1 Mark)

Que.10. Determine if the figures below are symmetrical. Mark ☺ below the symmetrical figure. (1 Mark)



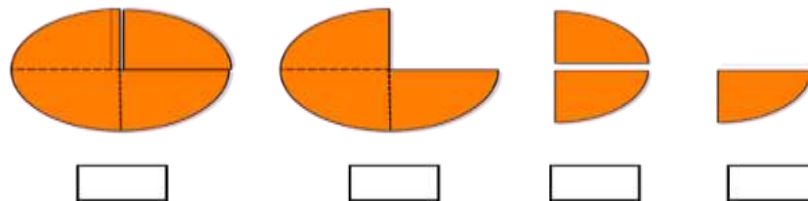
Que.11. Mark ☺ in the box below the shapes which are closed.

(1 Mark)







Que.12. Mark √ below the Quarter part

(1 Mark)



Que.13. Observe the information in the table below. Choosing the right option for answering the questions given below based on that. (2 Marks)

Favorite games for class 3 students

Name of the game	Number of Students (In picture Form)
Cricket	
Volley Ball	
Hockey	
Badminton	

• Which is the most favorite game? .....

• What is the difference between the number of students who like Badminton and Cricket?