



Student Name -

Q 1- Look at the pictures and write the numbers in words as well as in numerals.

1 Mark

Tens	Units
	
.....	

Q 2 Write the numbers before and after the following number.

1 Mark

	79	
--	----	--


Q 3 - Write the numbers in ascending and descending order. 62, 84, 48.

1 Mark

Ascending Order	
Descending Order	

Q 4 - Identify number step and write numbers.

1 Mark



Q 5- There are **47** mango and **35** neem trees in Ajbarao's field, how many trees are there in his field? 1 Mark

Tens	Units

Q 6 - Sakshi wants to buy a book worth Rs **85**. She has Rs **38** ,so how much more money does she need to buy the book ? 1 Mark

Tens	Units

Q 7 - Which notes and coins will have to be taken to get the given amount.

√ Mark in the box below.

Mark 1











Q 8 — You want to buy a mat for the stairs of your house. How long is the step?

Measure it and write.

1 Mark

.....

Q 9 - Circle the lightest object.

1 Mark



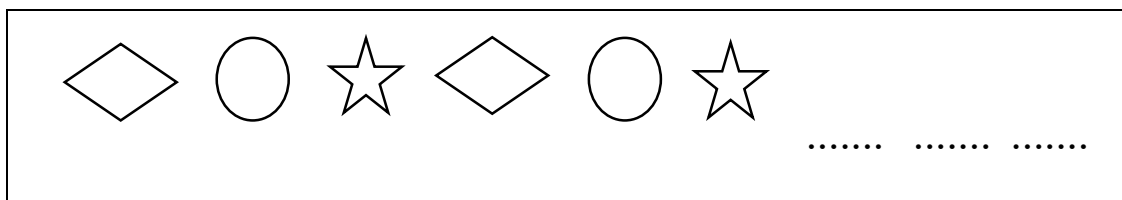
Q 10 - Which container will hold the maximum water? Mark \checkmark in the box below that container.

1 Mark



Q 11 - Complete the pattern.

1 Mark



Q 12 - Fill in the blanks.

1 Mark



+

+

=

x

=

Q 13- The children in the class decided to collect information about their favourite vegetables and the children presented the information in given table as follows.

3 Mark

Vegetables name	Number of Children
Fenugreek	
Potato	
Brinjal	
bitter gourd	
Shepu	

Answer the following questions with the help of above table.

1) Which vegetable do children like the least?

2) How many children like brinjal and bitter gourd ?

3) How many vegetables are given in total?