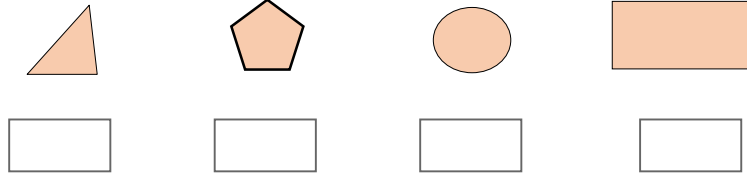


Student Name -

Que.1. Which of the following figure is Rectangle? Draw ☺ mark below it .

(Mark 1)



Que.2. Write the number formed by 50 Tens and 133 units.

(Mark 1)

(In numbers and words)

Que.3. Solve the following examples.

(Marks 2)

$$\begin{array}{r} 1) 658 \\ + 299 \\ \hline \end{array}$$

$$\begin{array}{r} 2) 734 \\ - 451 \\ \hline \end{array}$$

Que.4. Show the position of the minute hand and hour hand on the clock at

09:45.

(Mark 1)



Que.5. Akshata has 2 notes of Rs.200, 4 notes of Rs.50 and 5 coins of Rs.2.

How many rupees does she have?

(Mark 1)



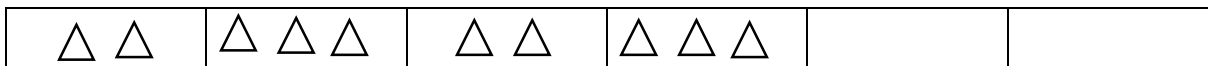
Answer : - Akshata has total ₹

Que.6. If 40 persons can travel in one bus. Then how many persons will travel in 25 buses? (Mark 1)

Que.7. If 90 apples are arranged evenly in 10 boxes, how many apples will be in each box? (Mark 1)

Que.8. Samruddhi has 42 seeds. She sows 6 seeds in one row. Then in how many rows she sows all the seeds? (Mark 1)

Que.9. Complete the following pattern. (Mark 1)

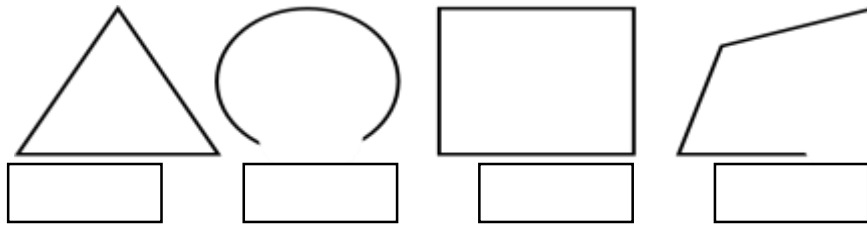


Que.10. Determine if the figures below are symmetrical. Mark \checkmark below the symmetrical figure. (Mark 1)



Que.11. Mark ☺ in the box below the shapes which are open.

(Mark 1)



Que.12. Show the fraction $\frac{3}{4}$ (Three quarter) by colouring the following shape.





(Mark 1)



Que.13. Study the table and answer the questions given below.

(Marks 2)

Information about books in a classroom library

Types of Books	Books
Nursery Rhymes	
Adventure Stories	
Funny Stories	
Poetry Books	

• What is the total number of books in a classroom library?

• What is the difference between the number of Nursery Rhymes books and Funny Stories books?