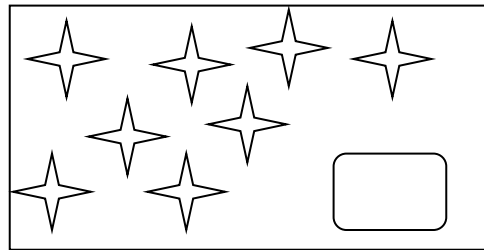



Student Name -

(Each question carry 1 mark)

Q.1. Count and Write.



Q.2 Write the middle number of following.



Q.3 Write the numbers before and after the following number.



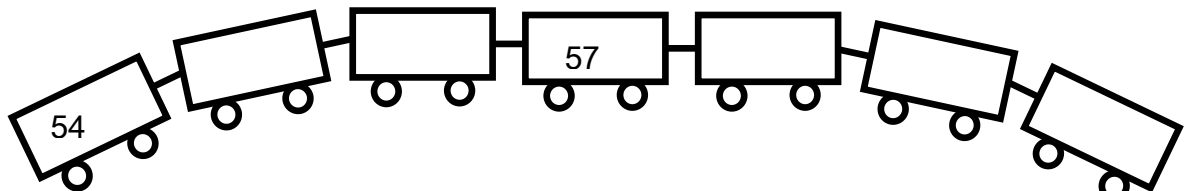
Q.4 Complete the following.



Q.5 Write the numbers in the form of unit and tens.

Numbers	Tens	Unit
26		

Q.6 Complete the following by writing number in each box.



Q.7 Add.

$$\begin{array}{r} 6 \\ + 2 \\ \hline \end{array}$$

Q.8. Subtract.

$$\begin{array}{r} 9 \\ - 5 \\ \hline \end{array}$$

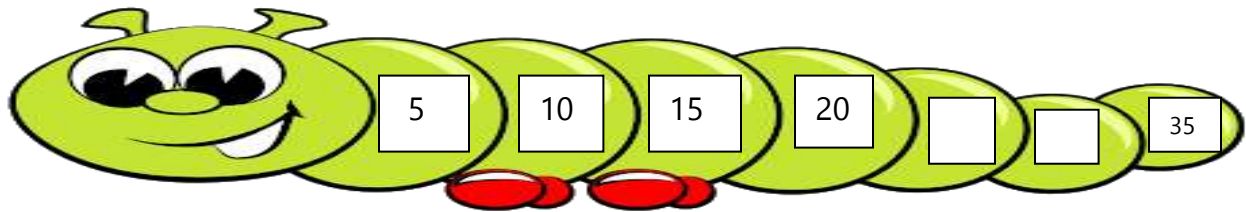
Q. 9. Nilesh grew 5 mango trees and Riya grew 4 coconut trees. Then total how many trees they grew together?

Q.10. Suman has 8 rupees. She bought pencil for 3 rupees, now how much rupees she has?


Q. 11. Colour the box for the vehicle which can take less time to reach a particular place.



Q.12. Complete the pattern.



Q 13. Write the name of the things you find around you for the given shapes.

Shape	Name of the things
	<p>.....</p>

Q.14. Think and write how will you write the following rupees in different forms.

Rupees	Form
9 Rupees	

Q.15. Put \checkmark sign for the day which comes between Sunday and Tuesday.

